



**BALUNI**  
**Public School**

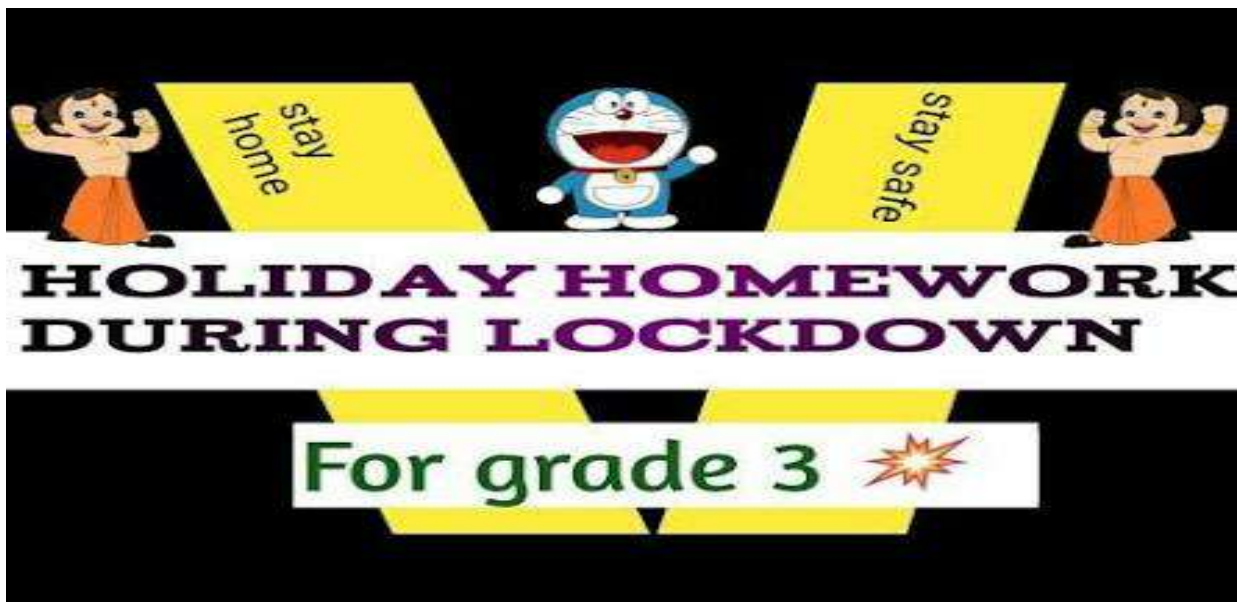
*Digital learning platform - Notes and worksheets*

**SUMMER HOLIDAYS**

**HOMEWORK**

**GRADE -3**

**SUBJECT - ENGLISH**



Edit with WPS Office

# Homework Folder



# 1--RIDDLES

1- *I am full of holes , I can hold water .  
What am I ? \_\_\_\_\_*

2- *what gets wet when drying .? \_\_\_\_\_*

3- *What are two things people never eat  
before breakfast ? \_\_\_\_\_*

4- *What has two hands and a face, but no  
arms and legs ? \_\_\_\_\_*

5- *What has 4 legs and only 1 foot ?*



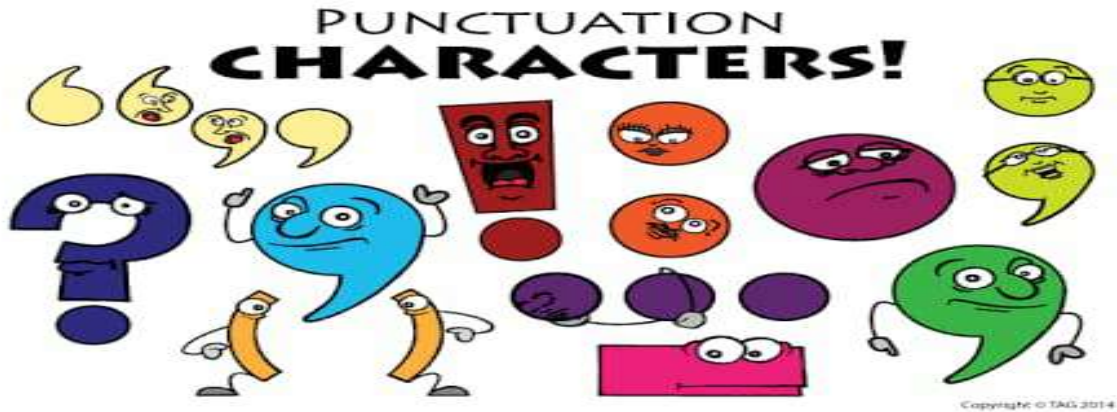
6- *What can't be used until it's broken?*

7- *What is it the more you take away the larger it becomes ?*

8- *What has many keys but can't any doors .?*

**2--PUNCTUATION :**  
**IN THE GARDEN :-**





★ Do you see the worms\_\_\_\_\_

★ I like growing carrots \_\_\_\_\_

★ apple fell from a tree\_\_\_\_\_

★ Is the sun out\_\_\_\_\_

★ The flowers are pink\_\_\_\_\_

★ A bird dropped s seed\_\_\_\_\_

★ Where is the shovel \_\_\_\_\_

★ Today is a nice day \_\_\_\_\_

★ Planting a garden is fun \_\_\_\_\_

★ \_\_\_\_\_

## 3-ANAGRAM:-



## LEMONS AND MELONS

*Change the letters around to make an anagram.*

*Ex. Lemon*

*Melon*

1- Pests

\_\_\_\_\_

2- shrub

\_\_\_\_\_

3- Mile.

\_\_\_\_\_

4- Rats

\_\_\_\_\_

5- Petal

\_\_\_\_\_

6- Skate

\_\_\_\_\_

7- palm

\_\_\_\_\_

8- Taps

\_\_\_\_\_

9- Vowels

\_\_\_\_\_

10- Was

\_\_\_\_\_



---

**4--SORT THE PLURAL NOUN**  
**AND SINGULAR NOUN :-**

*Direction :- Read the words below , then put it in the correct space. Colour the singular noun space RED and plural space is green.*

<b><i>SINGULAR NOUN</i></b>	<b><i>PLURAL NOUN</i></b>
-----------------------------	---------------------------





<i>Bags</i>	<i>Idea</i>	<i>Words</i>
<i>Wall</i>	<i>Shirts</i>	<i>Animal</i>
<i>Turtle</i>	<i>Brothers</i>	<i>Table</i>
<i>Windowd</i>	<i>Chairs</i>	<i>Flowering</i>

## *5--To , Too , Two*

*Direction- Fill it in each sentence with the correct word.*

*To --a function word , Too - also, Two - a*





## **number**

1- I am going \_\_\_\_\_read a book

2- Donald ran \_\_\_\_\_ miles.

3- Is Ann coming \_\_\_\_\_.

4- She got \_\_\_\_\_ wrong on the test.

5- My brother likes\_\_\_\_\_ play basketball.

6- I was at the park \_\_\_\_\_ times today.

7- Those clothes are \_\_\_\_\_expensive.

8- Rahul got \_\_\_\_\_strikes in bowling.

9- I need \_\_\_write \_\_\_pages for school.

10- I need you \_\_\_\_\_ help me it's\_\_\_\_\_ heavy

**6-UNDERLINE THE**  
**ADJECTIVE IN FOLLOWING**  
**SENTENCES :-**




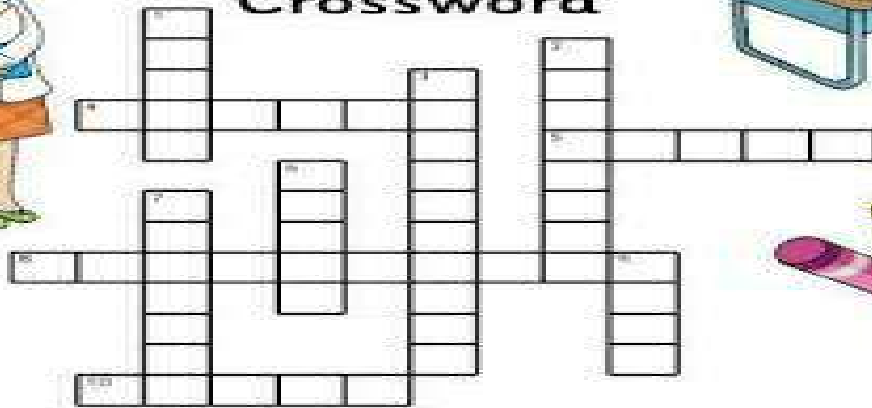
- (a) I saw a naughty boy playing with a white dog.*
- (b). The white lion looked at me.*
- (c) The long snake lays eggs in the green grass.*
- (d) He went out in the stormy night.*
- (e) The poor boy sat on the cold floor.*
- (f) The tank has fifty gallons of gasoline.*
- (g) A Skyscraper is a tall building.*
- (h) The moon was very bright.*
- (l) Rahul is the tallest boy in his class.*

## **7-- BACK TO SCHOOL CROSSWORD -**





## Back to School Crossword



### Across

4. Do you need to sharpen yours?
5. Write or draw on this.
8. You write on this with chalk.
10. Please \_\_\_\_\_ your name on your work.

### Down

1. Draw straight lines with this.
2. It has a keyboard and a screen.
3. Where you go to play at break (recess)
6. Read these at home or school.
7. They help you learn new things.
9. The teacher sits here.

Copyright © www.ActivityVillage.co.uk - Keeping Kids Busy



# 1--Arrange the following numbers in ascending and descending order :-

(a). 345, 195, 37,489,450

Ascending order \_\_\_\_\_, \_\_\_\_\_, \_\_\_\_\_, \_\_\_\_\_

Descending order \_\_\_\_\_, \_\_\_\_\_, \_\_\_\_\_, \_\_\_\_\_

(b) 597, 770, 227 , 495, 92

Ascending order \_\_\_\_\_, \_\_\_\_\_, \_\_\_\_\_, \_\_\_\_\_

Descending order \_\_\_\_\_, \_\_\_\_\_, \_\_\_\_\_, \_\_\_\_\_

(c) 389 ,695 , 942 , 913 , 745

Ascending order \_\_\_\_\_, \_\_\_\_\_, \_\_\_\_\_, \_\_\_\_\_

Descending order \_\_\_\_\_, \_\_\_\_\_, \_\_\_\_\_, \_\_\_\_\_

(d) 327 , 315, 393, 354 , 343

Ascending order \_\_\_\_\_, \_\_\_\_\_, \_\_\_\_\_, \_\_\_\_\_



Descending order \_\_\_\_\_, \_\_\_\_\_, \_\_\_\_\_, \_\_\_\_\_

## 2-COUNTING BACK BY DIGITS:

50	45			30			
44	40		32			20	
63	54			27			0
72	64		48			24	
24	22			16	14		
27	24			15		9	
32	28		20				4
42	36			18			0
65	60			45			

**3-WRITE THE CORRECT**

**ANSWER :-**



(a) The number that comes **before** 4006 is \_\_\_\_\_

(b) The number that comes **after** 3434 is \_\_\_\_\_

(c) The **successor** of the number 8006 is \_\_\_\_\_

(d) The numbers that comes **between** 2222 and 2224 is \_\_\_\_\_

(e) The **predecessor** of the number 1111 is \_\_\_\_\_

(f) The number that comes **between** 4999 and 5001 is \_\_\_\_\_

(g) The numbers that occurs in the **middle** of 6962 and 6964 is \_\_\_\_\_

4. ***(A) WRITE THE EXPANDED***



**FORM OF THE NUMBERS GIVEN  
BELOW.**



(A)  $23 = \underline{\quad} + \underline{\quad}$

(B)  $273 = \underline{\quad} + \underline{\quad} + \underline{\quad}$

(C)  $654 = \underline{\quad} + \underline{\quad} + \underline{\quad}$

(D)  $987 = \underline{\quad} + \underline{\quad} + \underline{\quad}$

(E)  $3465 = \underline{\quad} + \underline{\quad} + \underline{\quad} + \underline{\quad}$

(F)  $3547 = \underline{\quad} + \underline{\quad} + \underline{\quad} + \underline{\quad}$

**4 (B) WRITE THE SHORT**



## **FORM IF THE FOLLOWING :-**

**(A).**  $4000 + 50 + 6 = \underline{\hspace{2cm}}$

**(B).**  $9000 + 2 = \underline{\hspace{2cm}}$

**(C)**  $6000 + 300 + 20 + 2 = \underline{\hspace{2cm}}$

**(D)**  $1000 + 100 + 10 + = \underline{\hspace{2cm}}$

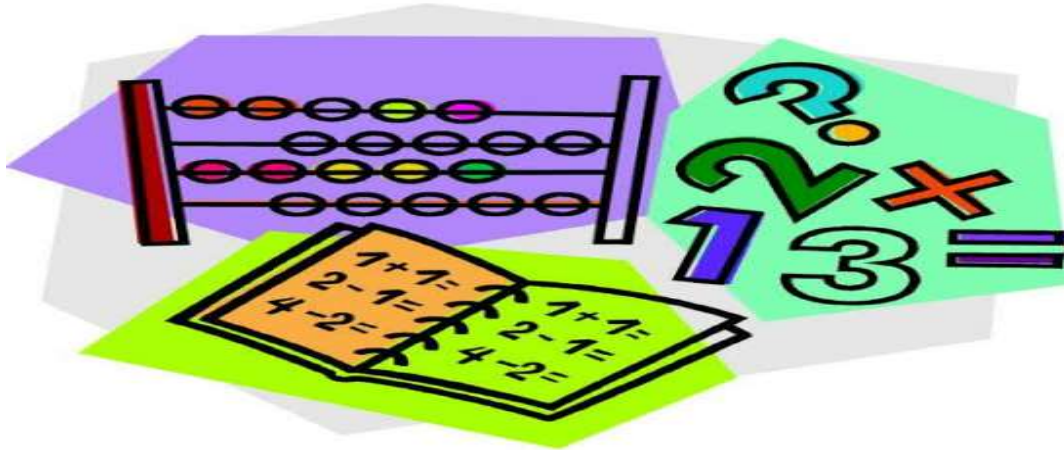
**(E)**  $7000 + 600 + 20 + 3 = \underline{\hspace{2cm}}$

**(F)**  $8000 + 200 + 40 + 3 = \underline{\hspace{2cm}}$





# 5-ADDITION SUMS :-



$$\begin{array}{r} \text{(a)} \quad 4 \quad 6 \\ + \quad 3 \quad 2 \\ \hline \end{array}$$

$$\begin{array}{r} \text{(b)} \quad 7 \quad 1 \\ + 2 \quad 6 \\ \hline \end{array}$$

$$\begin{array}{r} \text{(c)} \quad 7 \quad 2 \\ + 2 \quad 7 \\ \hline \end{array}$$

$$\begin{array}{r} \text{(d)} \quad 5 \quad 4 \\ + 3 \quad 4 \\ \hline \end{array}$$

$$\begin{array}{r} \text{(e)} \quad 8 \quad 3 \\ + 0 \quad 5 \\ \hline \end{array}$$

$$\begin{array}{r} \text{(f)} \quad 1 \quad 3 \\ + 0 \quad 8 \\ \hline \end{array}$$

$$\begin{array}{r} \text{(g)} \quad 6 \quad 4 \\ + \quad 2 \quad 4 \\ \hline \end{array}$$

$$\begin{array}{r} \text{(h)} \quad 7 \quad 3 \\ + \quad 6 \quad 3 \\ \hline \end{array}$$

**6--WRITE EACH SENTENCE  
BELOW IN NUMBER FORM :-**

**(A)** *four hundred twenty five* \_\_\_\_\_

**(B)** *six hundred seventy* \_\_\_\_\_

**(C)** *nine hundred twenty two* \_\_\_\_\_

**(D)** *three hundred forty six* \_\_\_\_\_

**(E)** *two hundred ninty seven* \_\_\_\_\_

**(F)** *Five thousand three hundred twenty two*

**(F)** *Eight thousand five hundred sixty*



three

## 7-Write in words

(A) 785-\_\_\_\_\_

(B) 345-\_\_\_\_\_

(C) 4367-\_\_\_\_\_

(D) 2364-\_\_\_\_\_

(E) 6754-\_\_\_\_\_

(F) 2345-\_\_\_\_\_

(G) 9876-\_\_\_\_\_

(H) 6543-\_\_\_\_\_

(I) 4864-\_\_\_\_\_

## 8- Read the questions

carefully:-



## **Fill in the blanks**

(A) December is the \_\_\_\_\_ month of the year.

(B) Monday is the 2nd day of the week, Friday is the \_\_\_\_\_ day of the week.

(C) The **greatest** number of 1 digit is \_\_\_\_\_

(D) The **smallest** number of two digits is \_\_\_\_\_ and three digits is \_\_\_\_\_.

(E) The **greatest** number of three digits is \_\_\_\_\_ and the **smallest** number of four digit is \_\_\_\_\_.

# **Subject-EVS-**



1. By using old newspapers, make a small model of **A BIRD'S NEST**

2. Draw **any 4 colorful pictures** on your own without help of anyone, on any paper sheet. Choices are following-

- a. Digestive system
- b. 2 types of claws of birds
- c. Traffic light
- d. Parts of plant
- e. Respiratory system.

3. With the help of cotton or any available stationary item make attractive picture of **DIFFERENT PHASES OF MOON.**

4. Dear students! Makes sure to go through again and **solve all**



*worksheets of EVS (FROM  
WORKSHEET 1 TO 10) for more  
knowledge and better practice.*

**SUBJECT HINDI-**





मिर्तियों की छुट्टियां सबसे आनंदमय दिन होते हैं। यह छुट्टियां बच्चों के जीवन के लिए नयी चीजों को सीखने और अपने कौशल को बढ़ावा देने का अवसर प्रदान करती हैं। यह वो सुखद क्षण होते हैं जब उन्हें स्कूल जाने की और जल्दी उठने की टेंशन नहीं होती।

तो बच्चों इन छुट्टियों का सदुपयोग हम ठीक से करें इसके लिए सबसे पहले हमें अपनी दैनिक दिनचर्या बनानी होगी।

1. अपनी हिंदी की लिखावट में सुधार लाने के लिए प्रतिदिन एक पेज सुन्दर लेख लिखिए।
2. दिए गए लिंक खोलकर प्रतिदिन एक कहानी पढ़िए। ( <https://youtu.be/PkkfMOEkwhE> )

हों और याद रहे की घर में ही रहे और सुरक्षित रहे।

# ***SUBJECT - SOCIAL STUDIES***

**1-Write 10 lines on water pollution.**



# 2- (A)SEE THE PICTURE AND WRITE THE NAME OF POLLUTION.







**(B) Write 10 lines about how can you stop the pollution?**

***3- What is communication?  
See the pictures and  
complete the chart.***



<u>Postal</u> <u>communicat</u> <u>ion</u>	<u>Tele</u> <u>communicat</u> <u>ion</u>	<u>Mass</u> <u>communicat</u> <u>ion</u>

*4- what is the means of transport?  
Draw the one colour full picture of  
each transport.*

**5-**

**Transport. Match.**

**1. Helicopter**



**2. Car**



**3. Bus**



**4. Lorry**



**5. Motorbike**



**6. Train**



**7. Taxi**



**8. Plane**



Dear students do all your holiday homework...and enjoy your vacations .

But take care of you and your family.



## Holiday Homework

Grade 3<sup>rd</sup> - Draw and colour a Landscape with the help of ear bud, thumb and finger print in your drawing file.